




Name: _____ Date: _____




Add Up the Apples!

Directions: Add up the apples to solve the problems.




①

$$2 + 1 = \underline{\quad 3 \quad}$$

 $+$

 $=$


②

$$2 + 2 = \underline{\quad \quad}$$

 $+$

 $=$


③

$$3 + 2 = \underline{\quad \quad}$$

 $+$

 $=$


④

$$1 + 2 = \underline{\quad \quad}$$

 $+$

 $=$


Name: _____ Date: _____

Add Up the Eggs!

Directions: Add up the eggs to solve the problems.

1

$$4 + 1 = \underline{\quad 5 \quad}$$

2

$$1 + 1 = \underline{\quad \quad}$$

3

$$1 + 4 = \underline{\quad \quad}$$

4

$$3 + 2 = \underline{\quad \quad}$$

Name: _____ Date: _____

Count All of Those Stars!

Directions: Count the stars. Then, follow the steps.

1

How many stars? _____

Draw 1 more. How many now? _____

2

How many stars? _____

Draw 1 more. How many now? _____

3

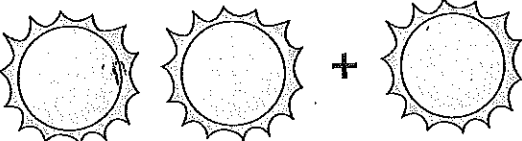
How many stars? _____

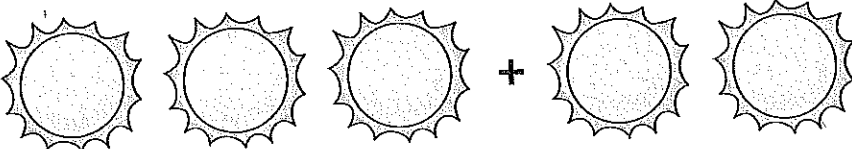
Draw 1 more. How many now? _____

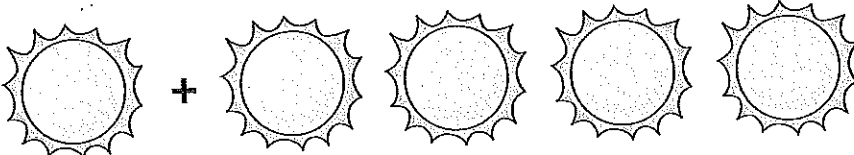
Name: _____ Date: _____

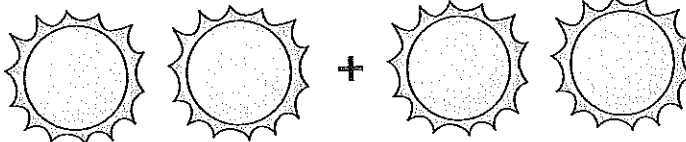
What's the Problem?

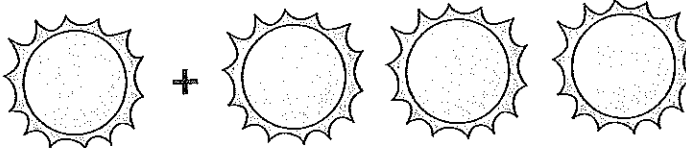
Directions: Write the answer to each problem.

1  = 3 suns

2  = _____ suns

3  = _____ suns

4  = _____ suns

5  = _____ suns